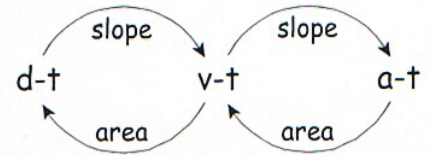


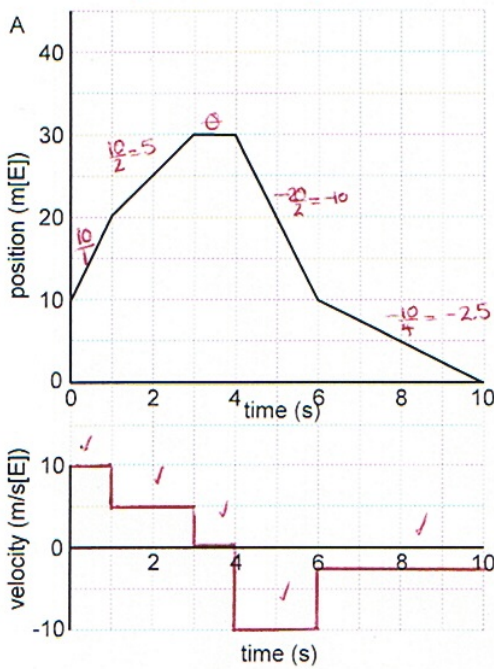
1. The following graphs represent trips performed in several stages. Use the graph given to construct the graph required. You may find the diagram to the right useful for remembering what you need to do.



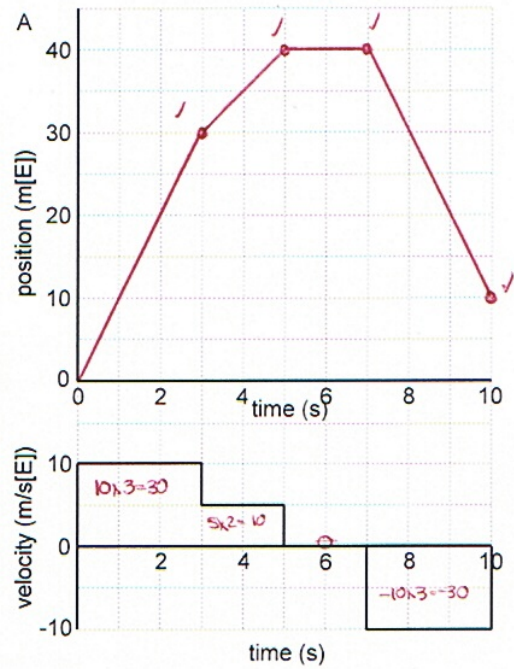
Remember that area is cumulative!

* don't forget slopes up to right → +ve slope
 " down " " → -ve "
 area above ⊖ line → +ve area
 " below " " → -ve area

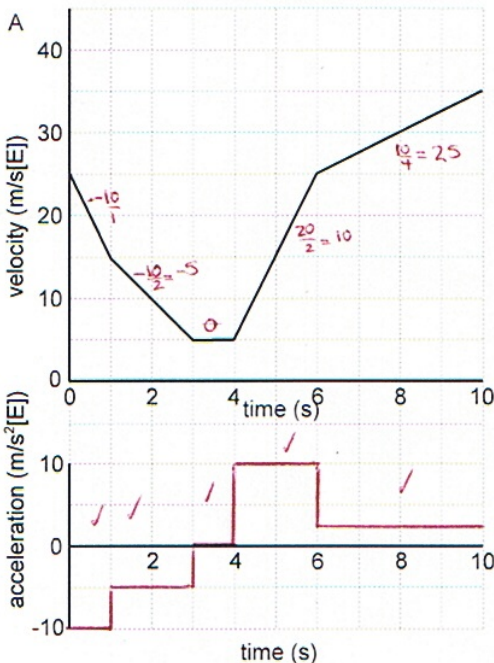
d-t ⇒ v-t



v-t ⇒ d-t



v-t ⇒ a-t



a-t ⇒ v-t

